

Şekil Sayı Eşleştirme

→
= 8

+

□
= 4

▽
= 9

☆
= 1

⬠
= 6

○
= 2

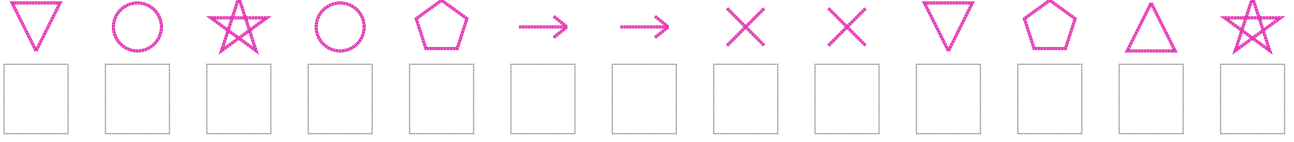
△
= 3

×

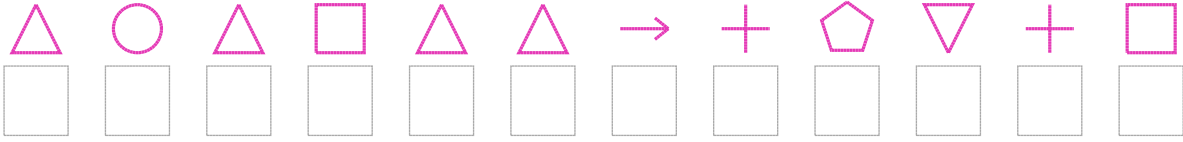
◇
= 7

Aşağıdaki uzun şifreleri hatasız çözerek altlarına yazın:

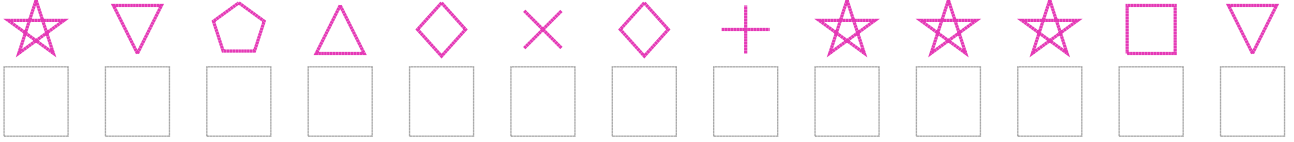
1. Şifre



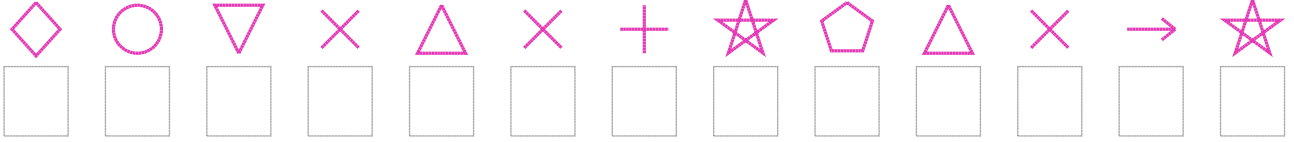
2. Şifre



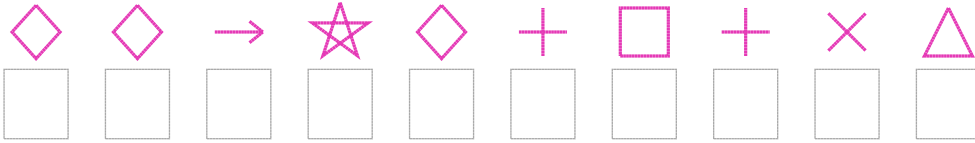
3. Şifre



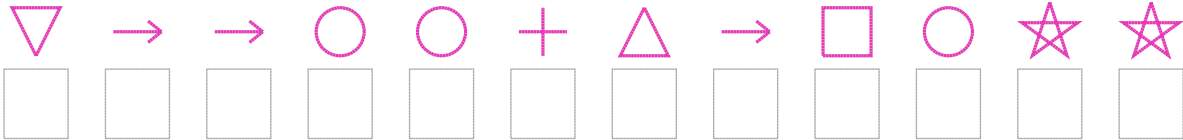
4. Şifre



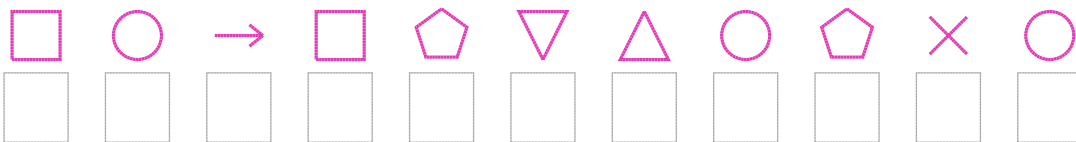
5. Şifre



6. Şifre



7. Şifre



□ BONUS: 5. ve 1. şifrenin ikinci rakamının toplamı kaçtır?

Cevap Anahtarı

1. Şifre: 9212688559631

2. Şifre: 323433806904

3. Şifre: 1963757011149

4. Şifre: 7295350163581

5. Şifre: 7781704053

6. Şifre: 988220384211

7. Şifre: 42846932652

□ Bonus Soru Cevabı: 9